

DAYANAND ANGLO VEDIC PUBLIC SCHOOL, AIROLI
QUESTION BANK (2017-18)
SUBJECT: MARATHI

STD : V

प्रश्न खालील प्रश्नांची उत्तरे एका वाक्यात लिहा

- 1) आईला पाहताच मुलगा का धावत आला ?
- 2) मालतीला कोणत्या गोष्टीचे नवल वाटले ?
- 3) मालतीने युक्ती करायचे का ठरवले ?
- 4) आईचे हात कशामुळे लालेलाल झाले?
- 5) विठठलचा जन्म कोठे झाला?
- 6) मुलाने किराणा सामान केव्हा आणायचे ठरवले ?
- 7) महर्षी विठठल रामजी शिंदे यांनी आयुष्यभर कोणते कार्य केले ?
- 8) मंजूळ गाणे कोण गाते
- 9) सहलीला जाताना मुलांनी काय काय सोबत नेले होते
- 10) मुलांची सहल कोठे गेली होती
- 11) पत्र कोणी पाठवले
- 12) छोटेसे बहीणभाऊ मोकळ्या आभाळात जाऊन काय करणार आहेत

प्रश्न . खालील दिलेल्या प्रश्नांपैकी कोणत्याही पाच प्रश्नांची उत्तरे लिहा .

- 1) नदीचे प्रदूषण कसे कमी करता येईल ते लिहा .
- 2) ऊनसावली शिवणापाणी यासारखे तुम्ही कोणकोणते खेळ खेळता त्यांची नावे लिहा .
- 3) तुम्ही आईला कोणकोणत्या कामात मदत करता ते लिहा .
- 4) तुमच्या आवडत्या सणाविषयी माहिती लिहा.
- 5) तुमच्या घरी आंबा व कैरीपासून कोणकोणते पदार्थ बनवतात ते लिहा .

प्रश्न खालील शब्दांचे लिंग बदला.

- 1) मुलगा 2) काका 3) मामा 4) डबी

प्रश्न खालील शब्दांचे लिंग ओळखा .

- 1) छत्री 2) डवा 3) पंखा 4) झाडू

प्रश्न खालील शब्दांचे वचन बदला .

- 1) झाड 2) आवे 3) फूल 4) ससा

प्रश्न खालील शब्दांचे वचन ओळखा .

- 1) वहया 2) पुस्तके 3) थैल्या 4) पंखा

प्रश्न खालील शब्द वापरून अर्थपूर्ण वाक्ये तयार करा

- 1) चांगुलपणा 2) मोठेपणा 3) कठीणपणा 4) सोपेपणा 5) ससा 6)

गुलाब

प्रश्न तुमच्या परिसरात एखादी दानशूर व्यक्ती राहते का ती संकटाच्या वेळी इतरांना कोणती मदत करते ते लिहा .

प्रश्न तुमच्या आवडत्या गुलाब हया फुलाविषयी माहिती लिहा .

प्रश्न तुमच्या आवडत्या सणाविषयी माहिती लिहा

प्रश्न खालील प्रश्नांची दिलेल्या सुचनेप्रमाणे उत्तरे लिहा .

- 1) सुधा मुलगी आहे. विशेषण वापरून वाक्य लिहा
- 2) माझ्याकडे लाल पेन आहे. विशेषण ओळखा
- 3) तो माझा भाऊ आहे सर्वनामाऐवजी नाम वापरून वाक्य लिहा
- 4) सुमन पुस्तक वाचते नाम ओळखा
- 5) राजू मुलगा आहे सर्वनाम वापरून वाक्य लिहा
- 6) तुम्हाला काय पाहिल्यावर आनंद होतो ते लिहा
- 7) किराणा मालाच्या दुकानात आढळून येणा या दोन वस्तूंची नावे लिहा
- 8) पैशांचे व्यवहार कोठे होतात त्या दोन ठिकाणांची नावे लिहा
- 9) भाजी मंडईत आढळून येणा या भाज्यांची नावे लिहा
- 10) तुम्ही पाण्याची बचत करण्यासाठी काय करता ते लिहा
- 11) आमराईचे चित्र काढा व रंगवा
- 12) फुलपाखरूचे चित्र काढा व रंगवा

प्रश्न खालील उतारा वाचून प्रश्नांची योग्य उत्तरे लिहा

महाराष्ट्र संताची भूमी आहे म्हणूनच महाराष्ट्राला संताची भूमी असेही समजतात अनेक संतांनी महाराष्ट्राच्या भूमीतच जन्म घेतला व व याच दुःखी लोकांना मदत करून जनकिर्ती मिळविली स्यापैकी एक म्हणजे साईबाबा साईबाबांना दत्ताचा अवतार मानले जाते साईबाबांची राहणी फार साधी होती ते अंगात कफणी घालीत डोक्याला फडके गुंडाळीत साईबाबांचे स्वतःच्या जेवणखाणाकडे अजिबात लक्ष नसे लहर असेल तर ते पोटभर जेवत नाहीतर उपाशी राहत पण ते नेहमी संतुष्ट असत साईबाबा नेहमी देवाचे नामस्मरण करत अल्ला भला करेगा असे ते नेहमी म्हणत भक्तांची अनेक संकटे त्यांनी दूर केली आहेत ईनांचा कैवारी म्हणून सर्वजण साईबाबांना ओळखतात

- 1) महाराष्ट्र कोणाची भूमी आहे
- 2) साईबाबांना कोणाचा अवतार मानले जाते
- 3) साईबाबांची अंगात काय धालत
- 4) सर्वजण साईबाबांना काय म्हणून ओळखतात
- 5) काय म्हणत भक्तांची अनेक संकटे साईबाबांनी दूर केली आहेत
- 6) वरील उता-याला योग्य शीर्षक द्या

प्रश्न खालील उतारा वाचून प्रश्नांची योग्य उत्तरे लिहा

कांगारू हा एक मजेदार प्राणी आहे .हा प्राणी बहुधा ऑस्ट्रेलिया आणि न्यू गिनी येथे आढळतो कांगारूची उंची जवळजवळ माणसाएवढीच असते त्याचे मागचे पाय खूप लांब असतात .या पायांमुळे तो लांब उडी मारतो. त्याचे पुढचे पाय आखूड असतात. पुढच्या पायांनी तो वस्तू पकडतो .जमीन उकरतो त्याचे तोंड हरणासारखे असते त्याचे डोळे सुरेख सौम्य गोल असतात.

- 1) कांगारू बहुधा कोठे आढळतो
- 2) कांगारूची उंची कोणाएवढी असते
- 3) कांगारूचे मागचे पाय कसे असतात
- 4) पुढच्या पायांनी कांगारू काय करतो
- 5) कांगारूचे तोंड कोणासारखे असते
- 6) वरील उता-याला योग्य शीर्षक द्या

ब)खालील उतारा वाचून प्रश्नांची योग्य उत्तरे लिहा

नीटनेटकेपणा हा फार महत्वाचा गुण आहे .आपण हात पाय व तोंड धुतले स्वच्छ कपडे घातले आणि केस विंचरले तर ,आपण चांगले दिसतो ,घरातल्या वस्तू नीट ठेवल्या आणि केरकचरा काढला तर, घर प्रसन्न दिसते ,घरच्या वस्तू जागच्या जागी ठेवल्या, तर प्रत्येकाला हवी ती वस्तू चटकन मिळते. नीटनेटकेपणाची सवय लागल्यावर, आपण आपल्या वस्तू जपून वापरतो. वीज पाणी इत्यादी गोष्टीही जपून वापरतो .

- 1) कोणता गुण महत्वाचा आहे
- 2) आपण चांगले केव्हा दिसतो
- 3) काय केले तर घर प्रसन्न दिसते
- 4) प्रत्येकाला हवी ती वस्तू चटकन केव्हा मिळते
- 5) नीटनेटकेपणाची सवय लागल्यावर आपण काय करतो

DAYANAND ANGLO VEDIC PUBLIC SCHOOL, AIROLI.
QUESTION BANK (2017-18)
SUBJECT: ENGLISH
STD: V

Answer any four questions in 30 – 40 words

- 1) List down the things Janaki needed to be qualified for the swimming competition.
- 2) What was the reason for Aunt Stephanie to worry?
- 3) 'Sending an e-mail is more beneficial than sending a letter by post'. Justify the given statement.
- 4) Why do rich countries become the cause for global warming?
- 5) How is the poet telling us to take care of trees?
- 6) Why were the children called 'Green Heroes'?
- 7) If you were the conservationist, What steps would you take to protect environment? Write in your own words not more than 50-60 words.
- 8) Imagine yourself to be the hacker . Write a diary entry expressing your guilt feeling after you were caught by the five chums, in not more than 80-90 words.
- 9) Write down the plans made by Sachin?
- 10) Why does the poet want everyone to plant a seed?
- 11) "Poor will suffer the most" Justify the given statement.
- 12) Why according to the poet an e-mail is the best creation?
- 13) What did Mrs. Stephanie say to the hacker after he was caught?
- 14) Explain the difficulties faced by Janaki during the competition?
- 15) If you see somebody harassing an old person. What steps would you take to protect them? Explain this with reference to the lesson "Five Chums and the Hacker".
- 16) Imagine yourself to be the 'Green Hero' . Write a diary entry expressing your happy feeling after making the surrounding clean, in not more than 80-90 words.
- 17) How did Janaki overcome all the obstacles?
- 18) Write at least three reasons that children give for not doing their work on time.
- 19) Describe the green brigade's mission in brief ?
- 20) The e-mail has made the poetess lazy. How?
- 21) What are the various reasons for Pingoo to worry ?
- 22) Even after its death the plant helps mankind . Explain the statement.
- 23) What did the five chums plan, to do in order to trap the hacker?
- 24) One of your classmates is very short in height .During the recess some boys tease him because of his height. Whom will you support the short boy or the naughty boys. Why ?
- 25) What measures will you take to stop global warming which is affecting our human life . Write a diary entry with expressing your feelings and emotions in more than 50-60 words.
- 26) Why were Neha and Sachin worried after seeing the beach?
- 27) 'Climate change affects our life and environment.' Explain the given statement.
- 28) "E-mail is the fastest mode of communication in today's world" Justify the given statement
- 29) Why did Aunt Stephanie forgive the hacker?
- 30) What are the valuable things that trees give us?

31) Do you think steps taken to prevent global warming will help to fight against the climate change? Give your answer by taking reference from the lesson 'It's getting hotter'.

32) Imagine you are Neha/Sachin. Write a diary entry expressing your experience at the beach and happiness at the success of the mission.

Read the extract of the poem carefully and answer the questions by choosing the right option given below.

33) "My letters are on my computer screen,

Getting messages is my cherished dream".

a) How does the poet receive the messages?

i) by computer

iii) by parcel

ii) by post

iv) none of the above

b) What is the poet's cherished dream?

i) to get toys

iii) to get messages

ii) to get dress

iv) to get mobile

34) "Watch it spread its wings of life,

Withstand the heat and snow".

a) 'It' in the above line means _____.

i) trees

iii) snow

ii) heat

iv) wings

b) What does the tree boldly face?

i) mankind

iii) leaves

ii) shade

iv) weather

35) "What if I can't swim?"

a) Identify the speaker.

i) Arya

iii) Noddy

ii) Janaki

iv) Nishat

b) Why is the speaker saying so?

i) As she was a good swimmer

ii) As she don't know swimming

iii) As she was tired swimming

iv) None of the above

36) "But what about the things she thinks?"

a) Who is the speaker of the above line?

i) Arya

iii) Noddy

ii) Nishat

iv) Bill

b) Who does 'She' refers to?

i) Hacker

iii) Basanti

ii) Stephanie

iv) Ary

37) "I can't figure out if e-mail is a boon or a bane,

But without it life would never be the same".

a) What is the meaning of boon or a bane?

i) big or small

ii) up or down

iii) good or bad

iv) sit or stand

- b) Life without an _____ would never be the same.
i) postman ii) battalion
iii) mailbox iv) e-mail

- 38)** "Plant the seed into the ground,
Stand back and watch it grow".
a) What does the poet want us to plant?
i) seed ii) branches
iii) leaf iv) flower
b) "Stand back" in the second line means _____.
i) seedling ii) wait
iii) weight iv) shade

- 39)** "I have found a sysedit.exe"
a) Identify the speaker.
i) Janaki ii) Arya
iii) Neha iv) Bill
b) What is sysedit.exe?
i) message ii) virus
iii) hacker iv) microphone

- 40)** "That's nice, but will it work?"
a) Identify the speaker.
i) Basanti ii) Bill
iii) Neha iv) Sachin
b) What is the speaker talking about?
i) cleanliness ii) virus
iii) hacker iv) global warming

41) "That, any way is a fashion out of mode Or a battalion of long lost friends".

(i) According to the poetess which fashion is out of mode

- (a) Wearing designer clothes (b) talking on the phone
(c) writing letters (d) chatting on the phone

(ii) What does "battalion" refer to here?

- (a) a group of new friends (b) a group of old friends
(c) only few selected friends (d) friends we meet everyday

42) "Watch its leaves turn many shades

Watch it spread its wings of life ."

(i) Here what does wings refer to ?

- (a) fingers (b) roots
(c) leaves (d) branches

(ii) Leaves turn shade due to _____

- (a) change in season (b) change in colour
(c) change in deeds (d) change in climate

43) (a) 'It means , 'that someone has infected this computer with a virus' .

- (i) Who is the speaker of the above line ?
(ii) The computer has been infected with what ?

44) It's time for you all to take up a stand and fight against the climate change.

(i) What does "you all" refer to ?

(ii) Against what are they standing and fighting ?

45) Read the following extracts and answer the following questions:

1. "The world is heating up. And I'm sorry to say it's all people's fault"

a) Why is the world heating up ?

b) How are people responsible for it?

2. "Oh ! It's made you lazy."

a) Who said these words?

b) Who is considered to be lazy?

46) Write down the importance of an e-mail .

47) "Lots of promises were made but countries haven't been very good at carrying them out."

a) Who made the promises?

b) What promises were made?

48) "Oh! It's made you lazy."

a) Who is the speaker of the above line?

b) 'You' refers to whom?

49) "Oh! My God, it's awful, how can someone spoil such a beautiful place?"

a) Which place is the speaker referring to?

b) Who said the above line ?

**50) "But one day soon it knows it must
Grow old, wither and die."**

a) 'It' refers to whom?

b) Who is the speaker of the above lines?

DAYANAND ANGLO VEDIC PUBLIC SCHOOL, AIROLI
QUESTION BANK FOR II TERM (17-18)
SUBJECT: MATHS
STD-V

1. Multiply by

| Numeral | 10 | 100 | 1000 | 10,000 | 1,00,000 |
|----------|----|-----|------|--------|----------|
| 2.7 | | | | | |
| 3.06 | | | | | |
| 0.519 | | | | | |
| 35.826 | | | | | |
| 3.0075 | | | | | |
| 4.0602 | | | | | |
| 19.00375 | | | | | |

2. A litre of milk cost Rs. 7.25. Find the cost of 100 litres of milk.
3. A bag contains 98.6 kg of wheat. How much wheat is contained in 1000 such bags?
4. 2.25 m of cloth is required for stitching a shirt. How much cloth is required for stitching 10 shirts of the same size?
5. A piece of ribbon is 8.5cm long. Find in metres the length of 100 pieces of ribbon?
6. A boy's pace is 60cm. how many metres does he walk in 450 paces?
7. Take 29.30465 from 70.304 and multiply the difference by 10,000.
8. Take 100.101 from 101 and multiply the difference by 10,000.
9. Mr. joshi bought 10 pots of plant. Each pot plant costs Rs.15.87. He gave the cashier two hundred rupees. How much money did he receive back?
10. Divide: (do not show any working)
 - a) $15.9 \div 10$ b) $35.7 \div 10$ c) $259.38 \div 10$ d) $319.7 \div 100$ e) $796.2 \div 1000$
 - f) $2 \div 1000$ g) $62.07 \div 10000$ g) $589 \div 10000$
11. Multiply: a) 4.55 by 2 b) 7.25 by 16 c) 615.3 by 78 d) 0.539 by 876
 e) 0.007 by 268 f) 3.075 by 359
12. If $5.867 \times 6 = 35202$, then find the product of each of the following without actually performing multiplication
 - a) 5.867×6 b) 58.67×6 c) 586.7×6 d) 0.5867×6
13. If 1 litre of petrol cost Rs. 26.37, find the cost of 25 litres
14. If 1 book cost Rs.128.75, find the cost of 1 dozen books
15. Find the thickness of a layer of 370 sheets if the thickness of 1 sheet is 0.018 mm
16. What is temperature?
17. Find the average of
 - 1) the prices of 6 shirts are Rs. 352 , Rs.548, Rs. 265 , Rs. 459, Rs. 346 and Rs. 412
 - 2) Class attendance on 5 days was 55, 57, 59, 53, and 58

18. The average number of iron pipes in 15 trucks is 144, and the average number of iron pipes in 12 other trucks is 180. Find the average number of pipes in all the 27 trucks?

19. Convert the following temperature in the Fahrenheit scale:

- 1) 100°C 2) 95°C 3) 105°C 4) 30°C 5) 70°C

20. Convert the following temperature in the Celsius scale:

- 1) 122°F 2) 41°F 3) 32°F 4) 95°F

21. Find :

- 1) the average of first 5 odd numbers
- 2) the average of first 10 counting numbers
- 3) the average of first five multiples of 3
- 4) the average of first 5 prime numbers

22. The daily average of classes III ,IV and V on 6 days of a week are given below:

| | | | | | | |
|-----------|----|----|----|----|----|----|
| Class III | 45 | 45 | 44 | 42 | 41 | 43 |
| Class IV | 42 | 45 | 39 | 44 | 40 | 45 |
| Class V | 40 | 38 | 45 | 43 | 44 | 44 |

- a) Which class had the best average attendance during the week?
- b) On which day the average attendance of the three classes was the poorest?

23. The total sales of a cooperative store for 6 days is Rs.7280. What is the average daily sale of the store during the 6 days?

24. Find the average of 8,7,9,10 and 11

25. Four pieces of ribbons measure 38cm, 36cm,34cm and 40cm. Find the average length of ribbon piece in the group of given ribbon pieces.

26. What is the temperature?

27. What instrument do we use to measure hotness or coldness of a thing?

28. what is the normal body temperature of adult in both the scales?

29. Name both the scales?

30. Fill in the blanks:

- 1) The temperature of a frozen water is 32°F or _____ $^{\circ}\text{C}$.
- 2) The temperature of boiling water is 100°C or _____ $^{\circ}\text{F}$.
- 3) The temperature of a healthy adult is _____ $^{\circ}\text{C}$.
- 4) The thermometer which we keep at home to measure the temperature of our family members when they have fever is _____ thermometer, with _____ scale.

31. Draw a clinical thermometer and label

- a) The freezing point of water
- b) The boiling point of water
- c) The normal temperature of a healthy human body.

32. Write a formula to convert $^{\circ}\text{F}$ to $^{\circ}\text{C}$.

33. A comfortable room temperature is said to be 68°F , or _____ $^{\circ}\text{C}$.

34. To which scale are the clinical thermometers marked?
35. I had to fly to Mumbai from Delhi where temperature was 45°C . In Mumbai, I found the temperature was less by 20°F than Delhi. What is the temperature in $^{\circ}\text{F}$ in Mumbai?
36. Fill in the blanks with right angled, acute angled or obtuse angled triangle :
- In ΔABC , if $\angle A = 110^{\circ}$, $\angle B = 45^{\circ}$, then ΔABC is _____ Δ
 - In ΔPQR , if $\angle P = 70^{\circ}$, $\angle Q = 70^{\circ}$, then ΔPQR is _____ Δ
 - In ΔLMN , if $\angle L = 90^{\circ}$, $\angle M = 45^{\circ}$, then ΔLMN is _____ Δ
37. a) How many right angles can a triangle have?
 b) How many obtuse angles can a triangle have?
38. Determine the kind of triangle if
- $AB = 5\text{cm}$, $BC = 6.5\text{cm}$, $CA = 6.5\text{ cm}$
 - $PQ = 2.1\text{cm}$, $QR = 4\text{cm}$, $RP = 5\text{cm}$
 - $XY = 5\text{cm}$, $YZ = 5\text{cm}$, $XZ = 5\text{cm}$.
39. Draw a triangle MAT. Name its vertices, sides and angles
40. The measures of 2 angles of a triangle are 30° , 30° . Find the third angle. What type of triangle is this?
41. In triangle ABC, if the measure of $\angle B = 46^{\circ}$ and measure of $\angle C = 53^{\circ}$, find the measure of angle A.
42. A triangle cannot be drawn with the following set of angles
- $60^{\circ}, 70^{\circ}, 50^{\circ}$
 - $90^{\circ}, 108^{\circ}, 72^{\circ}$
 - $40^{\circ}, 110^{\circ}, 30^{\circ}$
 - $60^{\circ}, 60^{\circ}, 60^{\circ}$
43. Fill in the blanks:
- Insert the appropriate sign in the given \square so as to get 29
 $27 + 8 \square 4$
 - To solve a numerical expression, we follow the simplification rule _____
 - $1.3 + 1.8 \times 4 = \underline{\hspace{2cm}}$
 - $4 + .4 \times 4 \div 4 = \underline{\hspace{2cm}}$
44. Simplify:
- $9 + 12 \div 3 - 2$
 - $28 - 3 \times 5 + 4$
 - $36 \div 6 + 3 \times 2$
 - $502 \times 1 - 7 + \frac{35}{10}$
 - $\frac{3}{4} + \frac{4}{13} \div \frac{3}{52} - 6$
 - $1.7 + 2.5 - 1.8 \div 0.9$
 - $4.2 \times 5.25 \text{ of } 0.5 \div 1.5$
45. Simplify and compare the given expression
- $18 - 2 \times 4 + 3$ \bigcirc $18 - 3 + 2 \times 4$

46. John deposited Rs. 400 in a bank for 3 years. Calculate the interest he will get at the rate of 7% per year.
47. Supriya borrowed Rs.1600 from her friend at $10\frac{1}{2}$ % interest per annum. She returned the money after $2\frac{1}{4}$ years .What interest did she pay to her friend ? Also find the amount
48. Which interest is more ?
 i) P= 8000, R=9%, T= 6 months
 ii) P= 9000, R= 8%, T= 183 days (use 1 year= 366 days)
49. Mr. Arvandan borrowed Rs. 2500 for 9 months. Find the amount to be repaid at the rate of 12 % per annum.
50. A man borrowed Rs.500 at 6% per annum. At the end of $3\frac{1}{2}$ years, he paid back an amount of Rs. 350 and gave his radio for the balance amount. Find the cost of the radio.
51. Find the selling price if CP = Rs. 900 and gain = Rs. 90.
52. Find the Cost price if SP = Rs. 950 and loss = 30.
53. What will be the selling price if SP = Rs. 947 and loss = Rs. 38.
54. Find the missing entry –
 a) CP = Rs. 18.50, Profit = Rs. 4.75, SP = _____
 b) SP = Rs. 19650, Profit = Rs. 365, CP = _____
 c) CP = Rs. 34.25, Loss = Rs. 2.75, SP = _____
55. A man bought a bicycle for Rs. 1440 and spent Rs. 138 on its repairs. He then sold the bicycle for Rs. 1610. Find his profit or loss.
56. Seeta bought a purse; she sold it to Geeta for Rs. 85 at a profit of Rs. 10.25. For how much did she buy the purse?
57. Sumit bought a bag for Rs. 575. For how much should he sell it to gain Rs. 65?
58. A shopkeeper bought a mixer-grinder for Rs. 2080. Due to some defect, he had to sell it at a loss of Rs. 155. For how much did he sell the mixer-grinder?
59. Ajay bought a CD player for Rs. 6000 and sold it for Rs. 6200. Find the profit or loss he made.
60. A trader bought a Camera for Rs. 1200 and spends Rs. 300 on repair charges. Find the profit or loss, if his selling price is Rs. 1300.
61. Express each of the following as a fraction in its lowest term.
 a) 35% b) $7\frac{1}{2}$ % c) 16 % d) 72%
62. Express each of the following as a decimal:
 a) 7 % b) 1.5 % c) 35.6% d) 0.45%
63. Convert each of the following into percentage.
 a) 5 b) 4.5 c) 0.02 d) $1\frac{1}{2}$
64. Find the value of the following:
 a) 25% of Rs 500 b) 50% of 40 minutes c) 15% of 600 kg d) 49% of 200 Km
65. Suma gets 42 out of 50 in test – I and 16 out of 20 in test- II. In which test did she perform better?

DAYANAND ANGLO VEDIC PUBLIC , SCHOOL
QUESTION BANK (2017-18)
SUB : HINDI
STD : V

प्रश्न 1 नीचे दिए गए पठित गद्यांश को पढ़कर पूछे गए प्रश्नों के उत्तर लिखिए :

कलिंग के राजा को भी इस आक्रमण के बारे में जानकारी मिली। उसके पास प्रशिक्षित सेना थी। अच्छी सैन्य सामग्री थी। इसके बावजूद वह जानता था कि उसकी सेना आक्रमणकारी दल के सामने नहीं टिक पाएगी। उसका राज्य तहस-बहस हो जाएगा। वह बुद्धिमान साहसी शूरवीर और स्वाभिमानी था। उसने राज्य के बुद्धिमान व्यक्तियों की एक गुप्त बैठक बुलाई। सारी स्थिति पर विचार करने के बाद एक बुद्धिमान व्यक्ति ने कहा 'युद्ध सैनिक बल से नहीं बुद्धि बल से जीते जाते हैं।'

प्रश्न 1 आक्रमण की जानकारी किसे मिली

- 2 कलिंग के राजा के पास कैसी सैना थी
- 3 कलिंग का राजा कैसा था
- 4 एक बुद्धिमान व्यक्ति ने क्या कहा
- 5 ऊपर दिया गया गद्यांश किस पाठ से लिया गया है

प्रश्न 2 नीचे दिए गए अपठित पद्यांश को पढ़कर पूछे गए प्रश्नों के उत्तर लिखिए :

नंद घर आनंद है छाया नन्हा कान्हा गोकुल में है आया।
सुन समाचार सारे ऋषि मुनि दौड़े दौड़े आए।
खुद शिव भी महात्मा बन दर्शन को आए।
मैया झलक लाला की दिग्वाहिन सब करे प्रार्थना।
बिठा पालकी में कान्हा को मैया ने सबसे झूला झुलवाया।

प्रश्न 1 नंद के घर क्या छाया है

- 2 महात्मा बनकर कान्हा के दर्शन के लिए कौन आया
- 3 सभी मैया से क्या प्रार्थना कर रहे थे
- 4 नन्हा कान्हा कहा आया है
- 5 ऊपर दिए गए पद्यांश के लिए उचित शीर्षक लिखिए।

प्रश्न 3 नीचे दिए गए अपठित पद्यांश को पढ़कर पूछे गए प्रश्नों के सही विकल्प चुनकर लिखिए :

वागों की उस रसिक परी को गमलों वाले फूल न भाए।
जैसे सागर की मछली को गड्ढे का जल रास न आए।
शोर शरावे और धुएँसे इधर उधर मारी वह फिरती।
तूफानों के बीच नदी में जैसे कोई डोंगी तिरती
साष्टा रोक दो तीन दिनों ही तितली गमलों पर रह पाई।

- 1 गमलों वाले फूल किसे नहीं भाए
- 2 सागर की मछली को क्या रास नहीं आता
- 3 तितली इधर उधर मारी मारी क्यों फिर रही थी
- 4 तितली गमलों पर कितने दिन रह पाई
- 5 शहर की हवा कैसी थी

प्रश्न4 नीचे दिए गए वाक्यों को उचित शब्द से पूरा कीजिए :

- 1) साँप अपना फैलाए बैठा था। (फन / फ़न)
- 2) बच्चों ने नए साल पर पूरा घर दिया (सज़ा / सजा)
- 3) दही कौन-सा मुश्किल काम है। (जमाना / ज़माना)

प्रश्न5 नीचे दिए गए शब्दों के वचन बदलिए :

- 1 टहनी
- 2 पत्ती
- 3 चीज़

प्रश्न6 नीचे दिए गए संज्ञा शब्दों को विशेषण शब्द में बदलिए :

- 1 प्रसन्नता
- 2 दया

प्रश्न7 नीचे दिए गए शब्दों के समानार्थी शब्द लिखिए :

- 1 वृद्ध
- 2 नौका
- 3 पराजित

प्रश्न8 नीचे दिए गए शब्दों के विलोम शब्द लिखिए :

- 1 सहयोग
- 2 आदर
- 3 निश्चय
- 4 आग्रह

प्रश्न9 नीचे दिए गए वाक्यों के काल पहचानिए :

- 1 गाँव में कुआँ था।
- 2 हरित का पौधा नृत्य जैसी आ करता है।

प्रश्न10 नीचे दिए गए अव्यय का प्रयोग करते हुए एक वाक्य बनाइए :

- 1 इसलिए
- 2 किंतु

प्रश्न11 नीचे दिए गए शब्दों के मानक रूप लिखिए :

- 1 विद्वान
- 2 वृद्ध
- 3 छुट्टी

प्रश्न12 नीचे दिए गए मुहावरों का वाक्यों में प्रयोग कीजिए :

- 1 जी चुराना
- 2 दाल में कुछ काला होना

प्रश्न13 नीचे दिए गए वाक्यों के लिए एक शब्द लिखिए :

- 1 जो विमान चलाता है 2 जो संगीत का विशेषज्ञ हो

प्रश्न 14 नीचे दिए गए शब्दों में से उपसर्गों के योग से बने और प्रत्यय के योग से बने शब्द अलग अलग करके लिखिए :

मिलावट बदहाल बलिदानी हरघड़ी द्रमाग्राना प्रतिदिन

प्रश्न15 नीचे दिए गए शब्दों में उचित स्थान पर नुक्ता लगाइए :

- 1 जमीन 2 सफाई 3 बुर्जुग 4 काफिला

प्रश्न16 निम्नलिखित प्रश्नों के उत्तर दीजिए। लघु उत्तरीय

- 1 गांधी जी किस देश से वापस लौटे
2 हरित क्या बजाता था
3 सभी बंदी कैसे थे
4 कौन बार बार गिरती और चढ़ती है

प्रश्न17 रिक्त स्थानों की पूर्ति कीजिए :

- 1 लोहे की छड़ बन चुकी थी।
2 पौधों ने जैसी क्रिया की।
3 गांधी जी ने वल्लभ भाई को की उपाधि दी।
4 असफलता एक है स्वीकार करो।

प्रश्न18 किसने किससे कहा

- 1 युद्ध सैनिक बल से नहीं बुद्धि बल से जीते जाते हैं।
2 फल भी रास्ते में सूख गए।
3 यह टिकट आप ले लीजिए आपके ही नाम है।
4 यदि तुम शहर चले जाओगे तो मेरे काम काज में हाथ कौन बटाएगा

प्रश्न19 अनुमान और कल्पना

- 1 यदि वल्लभ भाई अपने पिता के काम काज में हाथ बटाते तो वे क्या होते
2 यदि आप वल्लभ भाई की जगह होते तो क्या करने का फैसला लेते
3 यदि हरित का पौधा बोल पाता तो क्या होता

प्रश्न20 निम्नलिखित पश्नों के उत्तर दीजिए। दीर्घ उत्तरीय

- 1 सरदार पटेल ने अहमदाबाद की सभा में क्या कहा
2 ताई ने हरित को क्या समझाया
3 कलिंग के राजा ने गुप्त बैठक क्यों बुलाई
4 गोताखोर कब सफल होता है

DAYANAND ANGLO VEDIC PUBLIC SCHOOL , AIROLI

QUESTION BANK - 2017-18

SUBJECT - SANSKRIT STD – V

प्रश्न 1 अंकीचे दिए गए शब्दरूप तालिका को पूरा कीजिए। अकारान्त पुं

शुक

| एकवचन | द्विवचन | बहुवचन | विभक्ति |
|--------|---------|----------|-----------|
| शुकात् | | | पञ्चमी |
| | शुकयोः | | षष्ठी |
| | | शुकानाम् | सप्तमी |
| हे शुक | | | सम्बोधनम् |

वानर

| एकवचन | द्विवचन | बहुवचन | विभक्ति |
|---------|-------------|-----------|-----------|
| | वानराभ्याम् | | पञ्चमी |
| वानरस्य | | | षष्ठी |
| | वानरयोः | | सप्तमी |
| | | हे वानराः | सम्बोधनम् |

नर

| एकवचन | द्विवचन | बहुवचन | विभक्ति |
|-------|---------|---------|---------|
| | | नरेभ्यः | पञ्चमी |
| | नरयोः | | षष्ठी |

| | | | |
|-------|---------------------------------|-------|-----------|
| | | | सप्तमी |
| | हे नरौ <input type="checkbox"/> | | सम्बोधनम् |

आनीचे दिए गए शब्दरूप तालिका को पूरा कीजिए । अकारान्त नपुं

वन

| एकवचन | द्विवचन | बहुवचन | विभक्ति |
|-------|-----------|-----------------------------------|-----------|
| | वनाभ्याम् | | पञ्चमी |
| वनस्य | | | षष्ठी |
| वने | | | सप्तमी |
| | | हे वनानि <input type="checkbox"/> | सम्बोधनम् |

फल

| एकवचन | द्विवचन | बहुवचन | विभक्ति |
|-------|---------------------------------|---------|-----------|
| | | फलाभ्यः | पञ्चमी |
| | फलयोः | | षष्ठी |
| | | फलानाम् | सप्तमी |
| | हे फले <input type="checkbox"/> | | सम्बोधनम् |

धन

| एकवचन | द्विवचन | बहुवचन | विभक्ति |
|----------------------------------|---------|---------|-----------|
| धनात् | | | पञ्चमी |
| | | धनानाम् | षष्ठी |
| | धनयोः | | सप्तमी |
| हे धनम् <input type="checkbox"/> | | | सम्बोधनम् |

इ नीचे दिए गए शब्दरूप तालिका को पूरा कीजिए। आकारान्त स्त्रीलिंग

लता

| एकवचन | द्विवचन | बहुवचन | विभक्ति |
|--------|-----------|----------------------------------|-----------|
| | लताभ्याम् | | पञ्चमी |
| लतायाः | | | षष्ठी |
| | लतयोः | | सप्तमी |
| | | हे लताः <input type="checkbox"/> | सम्बोधनम् |

माला

| एकवचन | द्विवचन | बहुवचन | विभक्ति |
|----------|----------------------------------|--------|-----------|
| मालायाः | | | पञ्चमी |
| | मालयोः | | षष्ठी |
| मालायाम् | | | सप्तमी |
| | हे माले <input type="checkbox"/> | | सम्बोधनम् |

महिला

| | | | |
|-----------------------------------|-------------|---------|-----------|
| एकवचन | द्विवचन | बहुवचन | विभक्ति |
| | महिलाभ्याम् | | पञ्चमी |
| | | महिलासु | षष्ठी |
| | महिलयोः | | सप्तमी |
| हे महिले <input type="checkbox"/> | | | सम्बोधनम् |

प्रश्न 2 नीचे दिए गए धातुरूप तालिका को पूरा कीजिए।

लटलकार वर्तमानकाल

पठ् पढ़ना

| | | | |
|-------------|-------|-------------------------------|-------------------------------|
| पुरुष | एकवचन | द्विवचन | बहुवचन |
| प्रथम पुरुष | पठति | पठत <input type="checkbox"/> | पठन्ति |
| मध्यम पुरुष | पठसि | पठथ <input type="checkbox"/> | पठथ |
| उत्तम पुरुष | पठामि | पठाव <input type="checkbox"/> | पठाम <input type="checkbox"/> |

चल् चलना

| | | | |
|-------------|-------|-------------------------------|--------|
| पुरुष | एकवचन | द्विवचन | बहुवचन |
| प्रथम पुरुष | | चलत <input type="checkbox"/> | |
| मध्यम पुरुष | चलसि | | |
| उत्तम पुरुष | | चलाव <input type="checkbox"/> | |

गम् जाना

| | | | |
|-------------|--------|---------|--------|
| पुरुष | एकवचन | द्विवचन | बहुवचन |
| प्रथम पुरुष | गच्छति | | |

| | | | |
|-------------|-------|--------------------------------|---------------------------------|
| मध्यम पुरुष | | गच्छथ <input type="checkbox"/> | |
| उत्तम पुरुष | | | गच्छाम <input type="checkbox"/> |

खाद् खाना

| | | | |
|-------------|--------|-------------------------------|--------|
| पुरुष | एकवचन | द्विवचन | बहुवचन |
| प्रथम पुरुष | | खादत <input type="checkbox"/> | |
| मध्यम पुरुष | | खादथ <input type="checkbox"/> | |
| उत्तम पुरुष | खादामि | | |

पिड खेलना

| | | | |
|-------------|--------|-------------------------------|---------|
| पुरुष | एकवचन | द्विवचन | बहुवचन |
| प्रथम पुरुष | | | पिडन्ति |
| मध्यम पुरुष | | पिडथ <input type="checkbox"/> | |
| उत्तम पुरुष | पिडामि | | |

प्रश्न 3 रिक्त स्थानों की पूर्ति कीजिए

1) तौ । (लिख

2) धूयम् । (हस्

3) माला अत्र । (अस्

5) यूयम् सदा । (क्रीड

6) सः । (चल

7) ध्रुवाम् । (नम्

8) ते । (वद्

9) त्वम् । (ध्वाव

10) तौ । (पठ)

प्रश्न 4 रिक्त स्थानों की पूर्ति कीजिए

1. धावति । बालः क्र वाला
2. वदत । महिला क्र महिले
3. पत्रम् क्र पत्राणि
4. मृत्यन्ति । बालिका क्र बालिका
5. अस्ति । चित्रम् क्र चित्राणि
6. मधुम् गायति । कोकिल क्र कोकिलौ
7. अस्ति । सः क्र सा
8. अल्पाहारे सेवम् खादति । सुधा क्र सुधा
9. बालौ पठत । तौ क्र ते
10. छात्रा पठन्ति । तै क्र स
11. बाला खादति । सा क्र सा
12. पत्रम् पतन्ति । तत् क्र तानि
13. गम गच्छति क्र गच्छन्ति
14. बालकौ खेलति क्र खेलत
15. बाला लिखति क्र लिखन्ति

प्रश्न 5 नीचे लिखे शब्दों पुल्लिंग, स्त्रीलिंग, नपुंसकलिंग के अनुसार लिखिए -

(भल्लूकः, बाला, फलम्, पुष्पम्, सीता, अश्व, शाला, नरः, पत्रम्)

1. पुल्लिंग

2. स्त्रीलिंग

3. नपुंसकलिंग

क).....

क).....

क).....

ख).....

ख).....

ख).....

घ).....

ग).....

ग).....

प्रश्न 6 संज्ञ में समय लिखिए ।

1. गोपालः व्यायामं करोति ।

6.00

2. गोपालः ईश्वरं नमति ।

6.45

3 □सः □□□□□□□□□□ प्रातराशं करोति ।

4 □मन्तरम् □□□□□□□□□□ विद्यालयं गच्छति ।

5 □□□□□□□□□□ अवकाशः भवति ।

6 □सः □□□□□□□□□□ गृहं आगच्छति ।

7 □माता □□□□□□□□□□ भोजनं ददाति ।

8 □सः □□□□□□□□□□ गृहकार्यं करोति ।

7 □15□

□7□30□


□1□00□

□2□15□

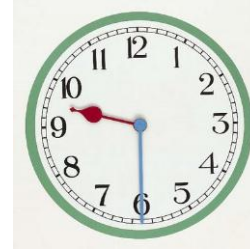
□2□30□

□3□00□

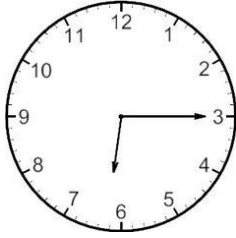
प्रश्न 7 □घड़ी देखकर संस□त में समय लिखिए ।




1 □ □□□□□□□□□



2 □ □□□□□□□□□



3 □ □□□□□□□□□



4 □ □□□□□□□□□

प्रश्न 8 □उचित अव्यय पद लिखिए ।

(बहिः □शनैः शनैः □ज □उपरि □अन्तः)

1 □मीनः जलस्य □□□□□□□□□□ तरति ।

2 □फलानि वृक्षस्य □□□□□□□□□□ सन्ति ।

3 □बालकाः गृहात् □□□□□□□□□□ खेलन्ति ।

4 □गजः □□□□□□□□□□ चलति ।

4 □उत्तम् बालकाः □□□□□□□□□□ असत्यम् वदति ।

DAYANAND ANGLO VEDIC PUBLIC SCHOOL , AIROLI
QUESTION BANK –(2017-18)

STD. V

SUBJECT- SCIENCE

1. The number of planets, in our solar system, is-----.
a) Seven b) nine c) eight d) six
2. Pole star defines the-----direction.
a) East b)south c) west d)north
3. India launched the first artificial satellite in -----.
a) 2008 b) 1986 c) 1975 d) 2001
4. -----is the largest planet of the solar system.
a) Jupiter b) mars c) earth d) Neptune
5. Germs of common cold spread through-----.
a)soil b)water c)air d) mosquitoes
6. Define---(any two)
1) Diseases 2) Revolution 3) Constellation
7. differentiate between rotation and revolution.
8. Differentiate between a planet and a star.
9. Write the name of terrestrial planets .
10. Write any three uses of artificial satellites.
11. Why do stars appear as a point to us ?
12. What is the direction of the rotation of the earth ?
13. Which stars are known as morning and evening stars ?
14. Name the constellation visible in winter.
15. Give reasons—
a) Same star to appear to rise four minutes earlier every day.
b) We see a whole different set of stars in the sky after every six month.
16. Why do, we usually not see the stars during the day ?
17. Write any three uses of solar energy .
18. State the conditions necessary for existence of life on a planet .
19. Neptune is known as windy planet . Why ?
20. What are the two phases of the moon ?
21. Name any three artificial satellite.
22. Write the name of gaseous planets . Why they are called so ?
23. Write any three symptoms of protein carbohydrate deficiency disease .
24. Write any three factors which are necessary for maintaining good health.

25. What are the two main categories of diseases ?
26. Write any two symptoms of disease Beri-Beri.
27. Write any two symptoms of calcium-phosphorus deficiency disease.
28. What are the three main causes of spoilage of food ?
30. What is the importance of food preservation ?
31. Explain any three methods of food preservation.
32. What are the two conditions which are necessary for the fast growth of
Micro-organisms.
33. Deficiency diseases are called non communicable diseases. Why ?

34. How can we prevent the communicable diseases ?
35. What is malnutrition ?
36. Name any two diseases which are spreading by biting insect .
37. What is communicable disease ?
38. How can we prevent the communicable diseases ?
39. How is the water important for animals ?
40. What are amphibious animals ? Write the name of any two amphibious animals.
41. Write a short note on water supply.
42. Write any two ways of lifting the ground water.
43. Write the name of four aquatic plants.
44. What is a solvent ?
45. Explain water cycle with the help of diagram.
46. Write an activity to show the solubility of liquids in water.
47. Write an activity to show the floating and sinking property of solids in water.
48. What is solution ?
49. What is transpiration ?
50. Write any three symptoms of iodine deficiency disease .

DAYANAND ANGLO VEDIC PUBLIC SCHOOL. AIROLI
SOCIAL SCIENCE QUESTION BANK
2017-18
STD: V

Q1. Name the following:

- | | |
|---|---|
| a) Four board games | b) Four outdoor games |
| c) Four sports persons | d) Four women sports persons |
| e) Four Asanas | f) Four occupation created due to mechanization |
| g) Four religions followed in India | h) Four types of mass communication |
| i) Four tourists' attraction of Manipur | j) Unique handicraft of Odisha |
| k) Martial art of Kerala | l) Martial art of Manipur |
| m) Traditional food of Nepalis | n) Neighbouring countries of India |
| o) Dresses worn in Pakistan | p) Residence of Wodeyar rulers |
| q) Cheapest means of transport | r) Jewel of India |
| s) State where Taj Mahal is located | t) Two fastest train in India |
| u) Two types of waterways | v) Four items transported through pipelines |
| w) Two types of communication | x) Types of service provided by Mobile |
| y) Fastest means of transport | z) Four different milk products. |

Q2. Define:

1. Fossil fuels 2. Dignity of labour 3. White revolution 4. Chaupal

Q3. Answer the following:

1. How does outdoor game score over indoor games?
2. What do you understand by Gender Discrimination? Who suffer due to it and how?
3. Explain changing trends in occupations with examples
4. Describe two places of tourist attractions of Manipur.
5. What makes India a favourite destination for tourists?
6. Why did people fear to travel to faraway places in olden times?
7. Which is the best mode of transport and why?

8. List India's immediate neighbours and their location.
9. Write similarities of dresses between India and her neighbours.
10. What is Tele conferencing? How is it useful?
11. Name three places of Golden Triangle.
12. Give reasons: a) Many farm labours lost their occupation.
b) The villagers were forced to beg when they came to the cities?

Q4. Mapwork:

- | | |
|---------------------------------------|---|
| a) Nepal | f) A state where Adu Huli Aata Played |
| b) Bangladesh | g) A State where Pallanguli is played |
| c) Myanmar | h) A state where boat race is held |
| d) Bhutan | i) A state whose capital is Jaipur |
| e) A State where Taj Mahal is located | j) A state where white revolution started |